



# Homework 3 : Intervals


Name the distance of the following intervals.

1 

\_\_\_\_\_

2 


\_\_\_\_\_

3 


\_\_\_\_\_

4 


\_\_\_\_\_

5 

\_\_\_\_\_

6 

\_\_\_\_\_

7 

\_\_\_\_\_

8 

\_\_\_\_\_

9 

\_\_\_\_\_

10 

\_\_\_\_\_

11 


\_\_\_\_\_

12 

\_\_\_\_\_

13 


\_\_\_\_\_

14 

\_\_\_\_\_

15 


\_\_\_\_\_

16 


\_\_\_\_\_

17 


\_\_\_\_\_

18 


\_\_\_\_\_

19 

\_\_\_\_\_

20 


\_\_\_\_\_

21 

\_\_\_\_\_

22 

\_\_\_\_\_

23 


\_\_\_\_\_

24 


\_\_\_\_\_

25 


\_\_\_\_\_

26 

\_\_\_\_\_

27 


\_\_\_\_\_

28 


\_\_\_\_\_

29 

\_\_\_\_\_

30 

\_\_\_\_\_

31 

\_\_\_\_\_

32 

\_\_\_\_\_

# Homework 3 : Intervals

2

33



\_\_\_\_\_

34



\_\_\_\_\_

35



\_\_\_\_\_

36



\_\_\_\_\_

37



\_\_\_\_\_

38



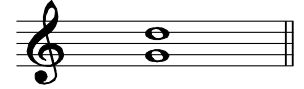
\_\_\_\_\_

39



\_\_\_\_\_

40



\_\_\_\_\_

41



\_\_\_\_\_

42




\_\_\_\_\_

43




\_\_\_\_\_

44



\_\_\_\_\_

45



\_\_\_\_\_

46



\_\_\_\_\_

47



\_\_\_\_\_

48




\_\_\_\_\_

49



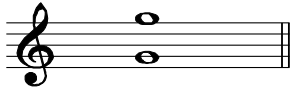
\_\_\_\_\_

50



\_\_\_\_\_

51



\_\_\_\_\_

52



\_\_\_\_\_

53



\_\_\_\_\_

54



\_\_\_\_\_

55



\_\_\_\_\_

56



\_\_\_\_\_

57



\_\_\_\_\_

58



\_\_\_\_\_

59



\_\_\_\_\_

60



\_\_\_\_\_